



KAMPALA PARENTS' SCHOOL 2004

PRIMARY SIX REVISION WORK

INTEGRATED SCIENCE – SET 21

Name: _____ Stream: _____

SECTION A

1. Name the gas that bubbles out when a bottle of soda is opened.

2. Name any one practice that is done in a cattle crush.

3. Why do objects float on water?

4. What role is played by the drone bee in the hive?

5. Name any one device that is used to store sound.

6. Where in the alimentary canal of a bird is food crushed?

7. Give one way of preserving fish.

8. How best can farmers control inbreeding on their farms?

9. Why is boiled water said to be safe for drinking?

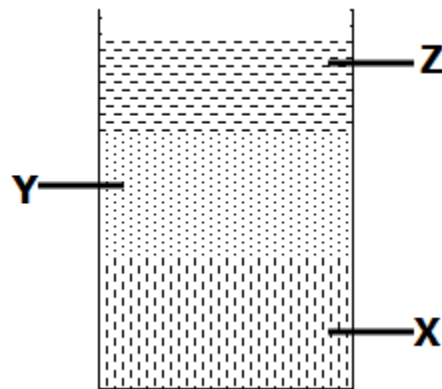
10. Give one way of controlling weeds in the garden.

11. State one effect of heat on matter.

12. Which part of a flower has the same function as the testis in a bull?

SECTION B

13. The diagram below shows the three liquids i.e. water, mercury and oil put in one container.



a) Name the liquids that settled at:

i) **X** _____ ii) **Z** _____

b) Why did liquid **X** settle at the bottom?

c) Name one liquid that can behave in the same way as liquid **Z**.

14.a) What is a balanced diet?

b) Why are we advised to eat food rich in a balanced diet?

c) Name one disease one can get if he/she lacks a balanced diet.

d) Name any one component of a balanced diet.



KAMPALA PARENTS' SCHOOL 2004

PRIMARY SIX REVISION WORK

SOCIAL STUDIES – SET 21

Name: _____ Stream: _____

1. How is a compass direction different from a compass?

2. Which line of longitude determines time?

3. Why is Kenya a non-land locked country?

4. Mention two of Uganda's neighbours crossed by the equator.

i) _____ ii) _____

5. How can landslides be controlled in hilly areas?

6. How do hilly areas promote communication?

7. How do rivers contribute to the spread of diseases in the community?

8. Name any two lava dammed lakes found in Uganda.

i) _____ ii) _____

9. Which type of climate is best described as;

i) Hot and wet _____

ii) Hot and dry _____

10. How does climate influence the following;

i) people's way of dressing

ii) peoples way of building?

11. What is the main tourist attraction in the following game parks:

i) Queen Elizabeth NGP _____

ii) Mgahinga NGP _____

iii) Kidepo valley NGP _____

12. a) State any two differences between Christians and Muslims.

b) Give any two ways religion has promoted the development of the country.

i) _____

ii) _____



KAMPALA PARENTS' SCHOOL 2004

PRIMARY SIX REVISION WORK

ENGLISH – SET 21

Name: _____ Stream: _____

In questions 1-5, use the correct form of the word in the brackets to complete the sentence

1. What a _____ day it was yesterday. (mist)
2. The planted flowers at Kampala Parents' School _____ the compound. (beauty)
3. The school counsellor advised pupils to be _____ to their parents and guardians. (obey)
4. The classteacher wanted to know the pupils' _____. (attend)
5. Light clothes are _____ by people in desert areas. (wear)

For questions 6-10, fill in the blank space with the most suitable word.

6. _____ Peter works hard, he will not pass the P.7 promotional exams.
7. 'Oliver Twist' is a famous novelist about _____ many books have been written.
8. The young boy who was _____ by lightning died immediately.
9. The teacher with _____ you went to Dubai, is kind hearted.
10. Not _____ is Jemimah a netballer but also a good debator.

Write each of the abbreviations in full.

11. PTO _____
12. tel _____

In questions 13 – 15, rewrite the sentences as instructed in the brackets.

13. The Principal was very kind to us. The master of ceremonies was very kind to us. (Rewrite as one sentence using:as well as.....)

14. It was not necessary for Bushiro to dodge the Science lesson. (Rewrite using:needn't.....)

15. I intend to buy a new Japanese car. (Rewrite the sentences beginning: My.....)

SECTION B

Write a composition about this topic: **MY FIRST TIME TO VISIT A HOTEL**

Guidelines

In your essay you can include the following:

- The name and location of the hotel.
- How you were received?
- The behaviour and dressing code of the waiters and waitresses.
- Four things you enjoyed most and two things you disliked.
- The lessons you learnt from the visit.
- Appreciating the people with whom you went to the hotel.

NB: Write your composition in clear paragraphs.

This image shows a single sheet of white paper with horizontal blue or grey ruling lines. The lines are evenly spaced and run across the width of the page. There are no margins, text, or other markings on the paper.



KAMPALA PARENTS' SCHOOL 2004

PRIMARY SIX REVISION WORK

MATHEMATICS – SET 21

Name: _____ Stream: _____

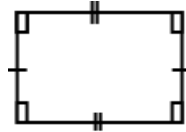
1. Solve for P: $3p-6=18$

2. A forty minute mathematics lesson ended at 9:10a.m. At what time did it start?

3. A quarter kg of sugar costs sh.900. How much does a kg of sugar cost?

4. Workout; $\frac{1}{4} \times \frac{2}{3} + \frac{1}{3}$

5. Show the line of folding symmetry of the figure below.



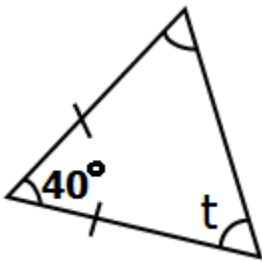
6. Workout:
$$\begin{array}{r} 431_{\text{five}} \\ -112_{\text{five}} \\ \hline \end{array}$$

7. A father gave sh.1500 to each of his 6 sons and sh.2500 to his only daughter. How much did he give out?

8. How many $\frac{2}{3}$ kg packets of millet flour can be obtained in 8kg of millet flour?

9. A lorry driver started his journey at 8:30a.m and reached his destination at 11:00a.m. If he was driving at a speed of 60km/hr, how long was the journey?

10. Find the value of angle marked t in the diagram below.



11. Kalule is 8 years older than his brother Moses, if their total age is 40 years.

a) How old is Kalule?

b) How old will Moses be in 5 years to come?

12. In a village, the ratio of men to women to children is 2:3:5 respectively. If there are 125 children

a) How many women are there?

b) How many men are there?

c) How many more children than men are there?

-END-